



Taking Away within 10






Activity Booklet

Name:


Greedy Monster Taking Away Activity Sheet




I'm a very greedy monster! Roll a dice to see how many pieces of food I will take away. How many pieces are left?




Farmyard Taking Away Activity Sheet





I am Farmer Phil. I would like to eat 1 strawberry. How many are left?





The cow would like to eat 3 tufts of grass. How many are left?



How many pieces of wheat are there? The chicken would like to eat 5 pieces. How many are left?



How many lettuces are there? The rabbit eats 4 lettuces. How many lettuces are left?




How many carrots are there? The goat eats 7 carrots. How many carrots are left?

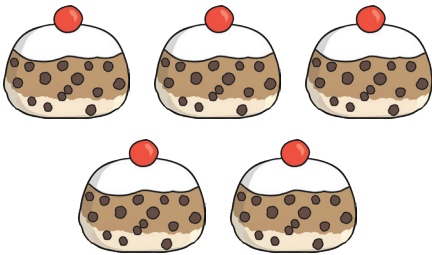
Taking Away

Currant Buns Subtraction

The teddy bears love going to the baker's shop to buy currant buns. How many currant buns are in the shop at first? Then, how many does a teddy take away? Can you draw and write how many buns are left in the shop?



First, there are **5**
currant buns.

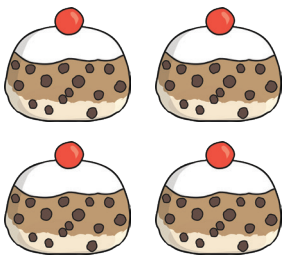


Then, a teddy takes
1 bun away.



Now, there
are buns.

First, there are **4**
currant buns.

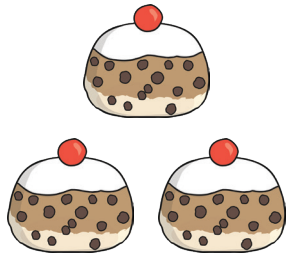


Then, a teddy takes
1 bun away.



Now, there
are buns.

First, there are **3**
currant buns.



Then, a teddy takes
1 bun away.



Now, there
are buns.

First, there are **2**
currant buns.



Then, a teddy takes
1 bun away.



Now, there
is bun.

First, there is **1**
currant bun.



Then, a teddy takes
1 bun away.



Now, there
are buns.

Taking Away from Ten Activity

First, there
are **3** stars.



Then, the
fairy takes
1 away.



Now,
there are
_____ stars.



First, there
are **5** stars.



Then, the
fairy takes
2 away.



Now,
there are
_____ stars.



First, there
are **8** stars.



Then, the
fairy takes
3 away.



Now,
there are
_____ stars.



First, there
are **6** stars.



Then, the
fairy takes
1 away.



Now,
there are
_____ stars.



First, there
are **2** stars.



Then, the
fairy takes
1 away.



Now,
there is
_____ star.

First, there
are **6** stars.



Then, the
fairy takes
2 away.



Now,
there are
_____ stars.

First, there
are **10** stars.



Then, the
fairy takes
4 away.



Now,
there are
_____ stars.

First, there
are **7** stars.



Then, the
fairy takes
5 away.











Now,
there are
_____ stars.



Hungry Monkey



Taking Away Activity

Hungry Monkey is eating some bananas. How many are left?

<p>First,</p>  <p>there are 4 bananas.</p>	<p>Then,</p>  <p>Hungry Monkey eats 2.</p>	<p>Now,</p> <p>how many are left?</p>
<p>First,</p>  <p>there are 5 bananas.</p>	<p>Then,</p>  <p>Hungry Monkey eats 1.</p>	<p>Now,</p> <p>how many are left?</p>
<p>First,</p>  <p>there are 7 bananas.</p>	<p>Then,</p>  <p>Hungry Monkey eats 3.</p>	<p>Now,</p> <p>how many are left?</p>

<p>First,</p>  <p>there are 2 bananas.</p>	<p>Then,</p>  <p>Hungry Monkey eats 1.</p>	<p>Now,</p> <p>how many are left?</p>
--	--	---------------------------------------

<p>First,</p>  <p>there are 10 bananas.</p>	<p>Then,</p>  <p>Hungry Monkey eats 5.</p>	<p>Now,</p> <p>how many are left?</p>
--	---	---------------------------------------

<p>First,</p>  <p>there are 8 bananas.</p>	<p>Then,</p>  <p>Hungry Monkey eats 3.</p>	<p>Now,</p> <p>how many are left?</p>
--	--	---------------------------------------