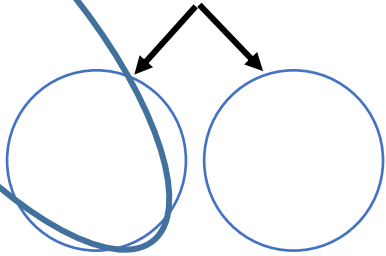
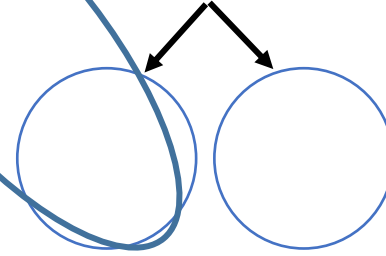


$$13 - 9 =$$



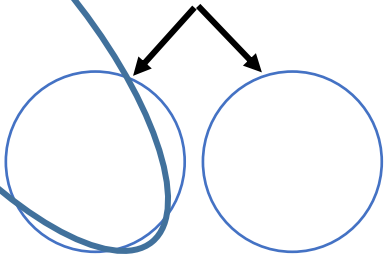
$$\square - \square = \square$$

$$15 - 6 =$$



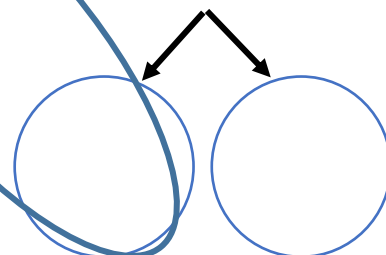
$$\square - \square = \square$$

$$14 - 8 =$$



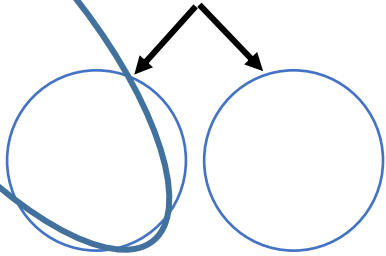
$$\square - \square = \square$$

$$12 - 7 =$$



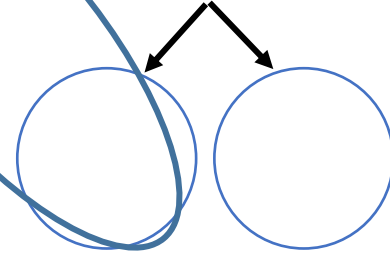
$$\square - \square = \square$$

$$15 - 9 =$$



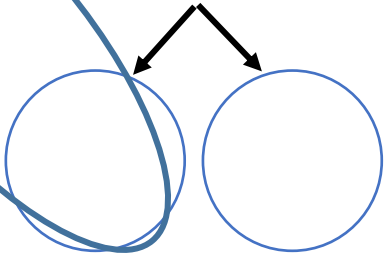
$$\square - \square = \square$$

$$16 - 9 =$$



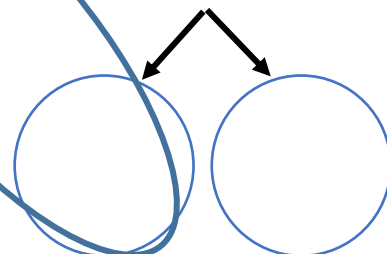
$$\square - \square = \square$$

$$13 - 8 =$$



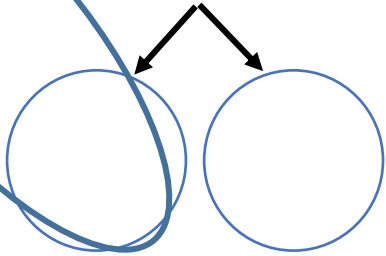
$$\square - \square = \square$$

$$15 - 7 =$$



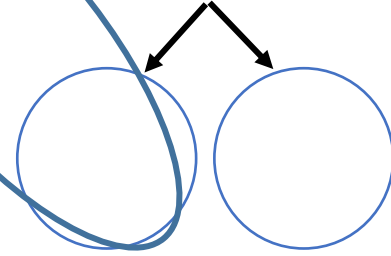
$$\square - \square = \square$$

$$16 - 8 =$$



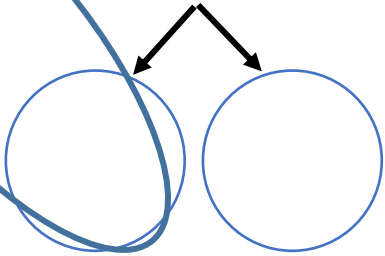
$$\square - \square = \square$$

$$17 - 9 =$$



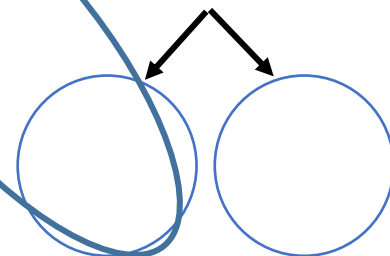
$$\square - \square = \square$$

$$18 - 9 =$$



$$\square - \square = \square$$

$$17 - 8 =$$



$$\square - \square = \square$$